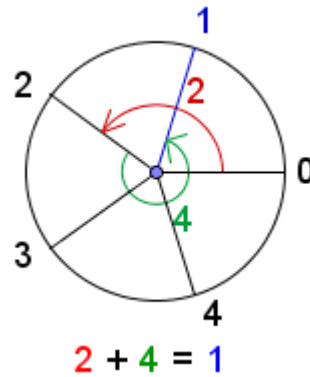
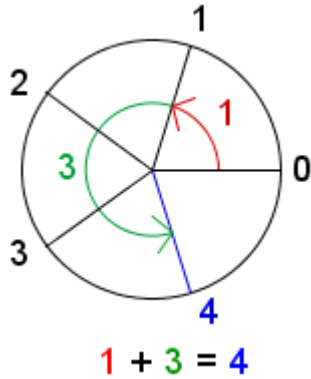


## Modulo 5 Worksheet

A number that is modulo 5 can have only the digits 0 through 4. When adding two numbers, the sum can only have the digits 0 through 4. If the sum goes past 4, the sum 'wraps around'.



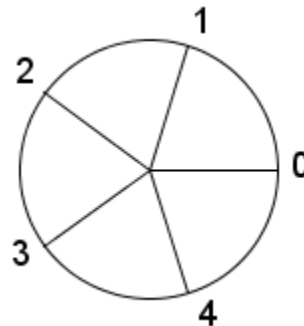
Use the modulo 5 wheel to calculate the sums of modulo 5 numbers.

1.  $2 + 2 =$  \_\_\_\_\_

2.  $1 + 4 =$  \_\_\_\_\_

3.  $3 + 4 =$  \_\_\_\_\_

4.  $0 + 2 =$  \_\_\_\_\_



Use the modulo 12 wheel to calculate the sums of modulo 12 numbers.

5.  $9 + 4 =$  \_\_\_\_\_

6.  $5 + 6 =$  \_\_\_\_\_

7.  $7 + 7 =$  \_\_\_\_\_

8.  $11 + 11 =$  \_\_\_\_\_

