
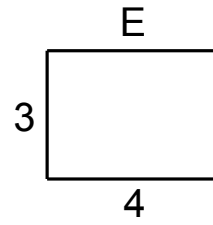
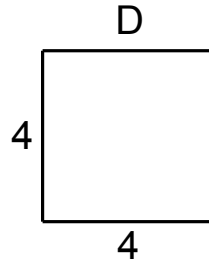
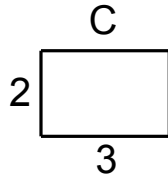
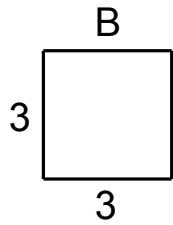
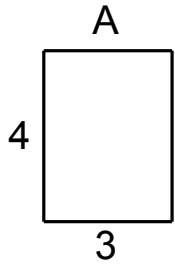


Name: \_\_\_\_\_ Period: \_\_\_\_\_ Date: \_\_\_\_\_

## Rectangle Worksheet

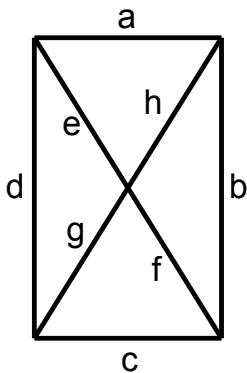
Use the following rectangles to complete the exercises. For study help, see <http://www.allmathwords.org/en/rectangle.html>.



Fill in the following table:

	Rectangle	Area	Perimeter
1	A	$4 \cdot 3 = 12$	$2 \cdot (4+3) = 14$
2	B		
3	C		
4	D		
5	E		
6	F		

Use the rectangle below to answer the following questions:



- |  |   |
|--|---|
| <p>7. <math>a \cong</math> _____</p> <p>8. <math>h \cong</math> _____</p> <p>9. <math>b \cong</math> _____</p> <p>10. <math>g \cong</math> _____</p> | <p>11. <math>f \cong</math> _____</p> <p>12. <math>g+h \cong</math> _____</p> <p>13. <math>d \parallel</math> _____</p> <p>14. <math>c \perp</math> _____</p> |
|--|---|